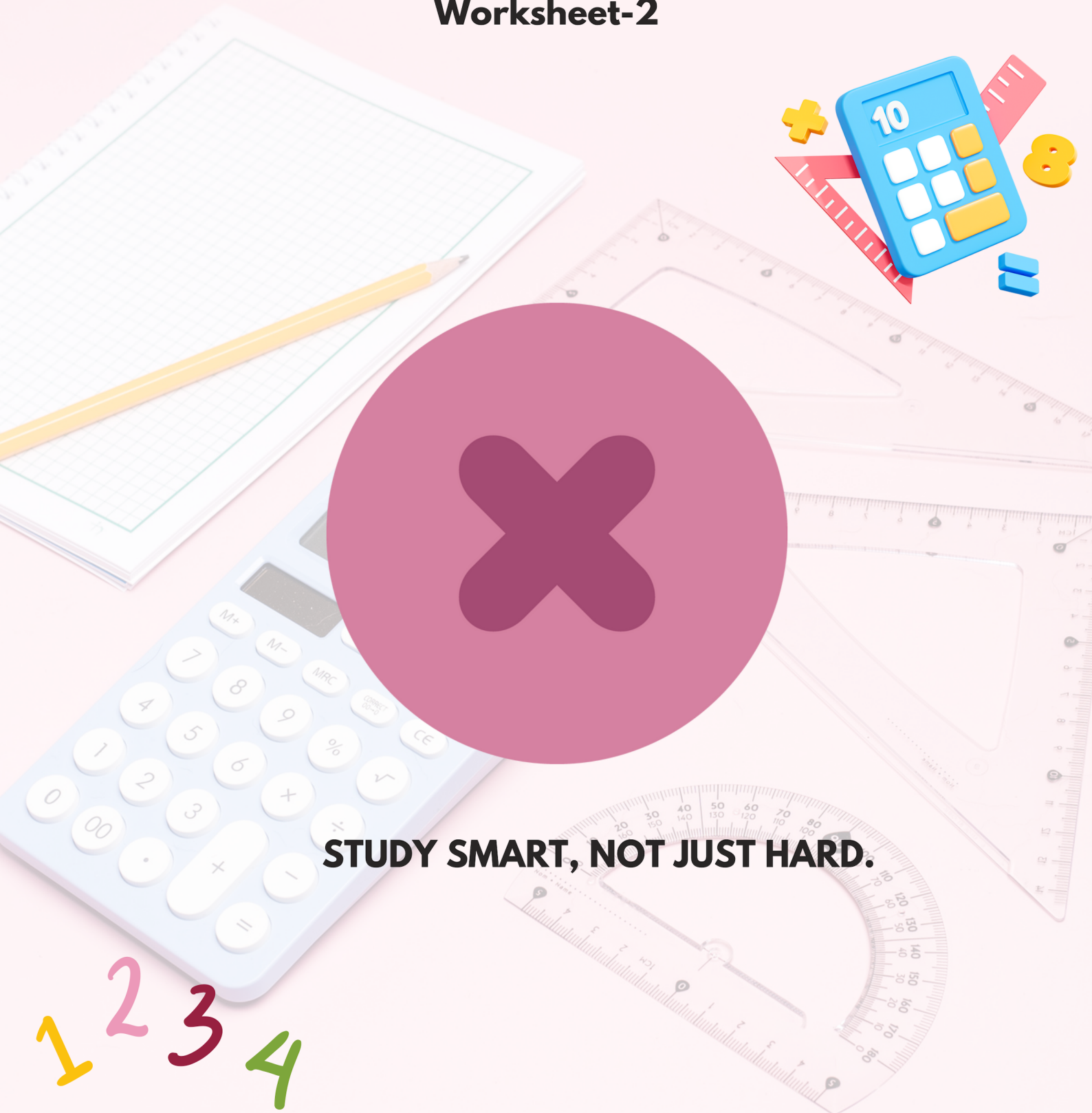








# Multiplication

## Worksheet-2



**STUDY SMART, NOT JUST HARD.**

1. The weight of Priya's  is equal to the weight of . The weight of  is equal to the weight of \_\_\_\_\_ .

- A. 10                      B. 4                      C. 5                      D. 8
- 

2. Soham has the given bucket of paint. Quantity of paint in 3 such buckets is \_\_\_\_\_ litres.


- A. 30  
B. 45  
C. 15  
D. 40



3. The weight of Aastha's doll is equal to 10 marbles. What will be the weight of two such dolls?

- A. 5 marbles  
B. 2 marbles  
C. 20 marbles  
D. 10 marbles
- 

4. How many tentacles do the 5 octopuses have altogether?



- A. 40                      B. 24                      C. 28                      D. 36
- 

5. Mrs. Smith bought 5 pairs of slippers. How many slippers were there altogether?

- A. 5                      B. 10                      C. 7                      D. 20
- 


6. Which of the following does not represent the picture?







- A. 2 times 5  
B.  $2 \times 5$   
C.  $5 + 5$   
D.  $2 + 5$
-

7. There are 2 ladybugs and 3 spiders in a garden. How many legs are there altogether?

- A. 40
- B. 36
- C. 58
- D. 38



---

8. If Manisha eats    each day, then how many  does she eat in 9 days?

- A. 27
- B. 28
- C. 18
- D. 21

---

9. A cow has 4 legs. 5 such cows will have \_\_\_\_\_ legs.

- A. 20
- B. 15
- C. 25
- D. 18



---

10. Find the missing number.

$$4 \times \square = 16$$

- A. 5
  - B. 6
  - C. 4
  - D. 9
-



TM

**MeandMath**

BELIEVE YOURSELF

# BOOST YOUR MATH PERFORMANCE WITH MeandMath



Our Premium Batches are 1:1, 1:2, 1:3 and 1:6 & another batch is 1: many batches.



Clear Doubts, Master Concepts, Excel with Confidence.



Learn on Your Schedule with Our Class Recordings.



Stay Ahead, Stay Sharp: Conquer Daily Homework Hassle-Free



Level Up Weekly: Ace Assessments with Confidence and Ease

## Join Our Live Classes

**Preparing for the  
Math Olympiad?**

Book Now >

## Register to MnM Olympiad

**Want to test your  
International Math  
Rank?**

Register Here >

Visit [meandmath.com](https://meandmath.com) to learn more about us.





TM

**MeandMath**

BELIEVE YOURSELF

# A Roadmap to Brilliance

Our curriculum paves the way.

○ **Core**      ○ **Advanced**      ○ **Scholar**

Visit [meandmath.com](https://meandmath.com) for further details on Curriculum.

*“There are many paths to success in Math. We help all students discover theirs.”*

**Are you stuck, not sure how to solve math problem?**

**Want to Super Charge your Math skills with our World Class practice content!**

**Join our Homework Help Group!**

[Join Now](#)



**Subscribe today to get a resource to unlock the World of Wisdom!**

[Subscribe Here](#)



Visit [meandmath.com](https://meandmath.com) to learn more about us.