

Number Sense


Worksheet-3



"Our greatest weakness lies in giving up. The most certain way to succeed is always to try just one more time" - Thomas Edison

1 2 3 4

1. Which of the following sets has same number of objects as the given set of stars?




B.



C.




D.



2. Which of the following number is NOT written on the given star?

- A. Eighty eight
- B. Forty seven
- C. Fifty nine
- D. Seventy six



3. Amrita has notebooks and pencils. Which of the following statements is true?


- A. Notebooks are more than pencils
- B. Notebook are less than pencils.
- C. Notebooks are equal to pencils
- D. None of these

4. Reema has . Meetu has .

more than Reema. How many ice-creams do they have altogether?

- A. 16
- B. 14
- C. 18
- D. 23

5. Arrange the following from the greatest to the smallest.



- A. R, P, Q, S
- B. R, Q, P, S
- C. S, P, Q, R
- D. S, P, R, Q

6. Read the statements and identify the number.


- I lie between 22 and 47.
- Sum of my digits is greater than 5 but less than 9.



- A. 35
- B. 30
- C. 36
- D. 40


7. What is 1 less than the number shown here?

- A. 94
- B. 95
- C. 93
- D. 90




8. Second girl from the right end is _____

- A. Pooja
- B. Piya
- C. Pinki
- D. Miara




9. Six numbers are written on the six rabbits as follows :




Which rabbit shows the number lying between 30 and 40 and having 7 at ones place?



10. Which of the following aquariums shows the least number of fishes?



P



Q



R

- A. R
- B. Q
- C. P
- D. Can't be determined



TM

MeandMath

BELIEVE YOURSELF

BOOST YOUR MATH PERFORMANCE WITH MeandMath



Our Premium Batches are 1:1, 1:2, 1:3 and 1:6 & another batch is 1: many batches.



Clear Doubts, Master Concepts, Excel with Confidence.



Learn on Your Schedule with Our Class Recordings.



Stay Ahead, Stay Sharp: Conquer Daily Homework Hassle-Free



Level Up Weekly: Ace Assessments with Confidence and Ease

Join Our Live Classes

**Preparing for the
Math Olympiad?**

Book Now >

Register to MnM Olympiad

**Want to test your
International Math
Rank?**

Register Here >

Visit meandmath.com to learn more about us.



TM

MeandMath

BELIEVE YOURSELF

A Roadmap to Brilliance

Our curriculum paves the way.

○ **Core** ○ **Advanced** ○ **Scholar**

Visit meandmath.com for further details on Curriculum.

“There are many paths to success in Math. We help all students discover theirs.”

Are you stuck, not sure how to solve math problem?

Want to Super Charge your Math skills with our World Class practice content!

Join our Homework Help Group!

[Join Now](#)



Subscribe today to get a resource to unlock the World of Wisdom!

[Subscribe Here](#)



Visit meandmath.com to learn more about us.