



Number Sense

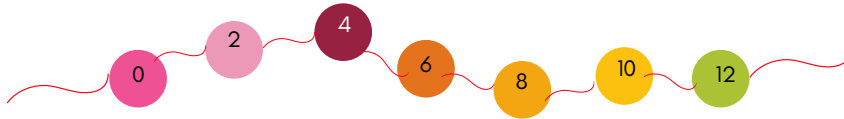
Worksheet-4



"Motivation is what gets you started. Habit is what keeps you going." - Jim Ryn

1 2 3 4

1. Which of the following numbers will NOT continue the given number pattern?



- A. 16 B. 15 C. 12 D. 14
-

2. Green toffees are _____ more than yellow toffees.



- A. 3 B. 2 C. 4 D. 5
-

3. Which of the following correctly shows the decreasing order of the following set of numbers?

- A. 508, 516, 531, 599
B. 599, 531, 516, 508
C. 531, 516, 599, 508
D. 508, 599, 516, 531



4. The place value of 7 in 703 is_____.

- A. 3 B. 30 C. 700 D. 0
-

5. Read the information carefully and answer the question given below it.


- The digit at the tens place of a 3-digit number is 4 more than the digit at its ones place.
- The digit at its ones place is 2.
- The digit at its hundreds place is the greatest one digit number.

What is the number?

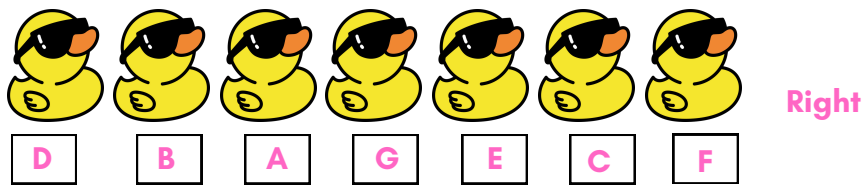
- A. 462 B. 752 C. 662 D. 962
-

6. Find the missing number.

- A. 6
B. 7
C. 8
D. 9



7. If duck G and duck E interchange their positions, then clown _____ is at the left end.



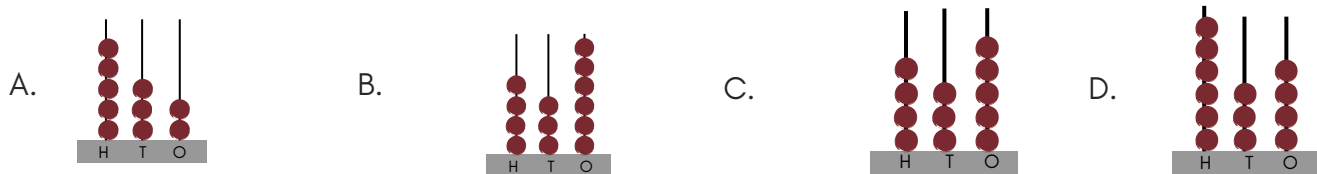
- A. D B. B C. F D. E

8. Number 5 belongs to group _____



- A. Only P B. Both P and Q C. Only S D. Both Q and S

9. Which abacus shows 436?



10. Select the CORRECT match.

- | P | Q | R |
|------------------------|-----|----------------------------|
| A. 18 tens + 12 ones | 192 | One hundred and ninety two |
| B. 24 tens - 150 ones | 85 | Eighty five |
| C. 70 tens - 5 tens | 655 | Six hundred and fifty |
| D. 284 ones + 216 ones | 490 | Four hundred and ninety |



TM

MeandMath

BELIEVE YOURSELF

BOOST YOUR MATH PERFORMANCE WITH MeandMath



Our Premium Batches are 1:1, 1:2, 1:3 and 1:6 & another batch is 1: many batches.



Clear Doubts, Master Concepts, Excel with Confidence.



Learn on Your Schedule with Our Class Recordings.



Stay Ahead, Stay Sharp: Conquer Daily Homework Hassle-Free



Level Up Weekly: Ace Assessments with Confidence and Ease

Join Our Live Classes

**Preparing for the
Math Olympiad?**

Book Now >

Register to MnM Olympiad

**Want to test your
International Math
Rank?**

Register Here >

Visit meandmath.com to learn more about us.



TM

MeandMath

BELIEVE YOURSELF

A Roadmap to Brilliance

Our curriculum paves the way.

○ **Core** ○ **Advanced** ○ **Scholar**

Visit meandmath.com for further details on Curriculum.

“There are many paths to success in Math. We help all students discover theirs.”

Are you stuck, not sure how to solve math problem?

Want to Super Charge your Math skills with our World Class practice content!

Join our Homework Help Group!

[Join Now](#) >

Subscribe today to get a resource to unlock the World of Wisdom!

[Subscribe Here](#) >

Visit meandmath.com to learn more about us.