



Number Sense

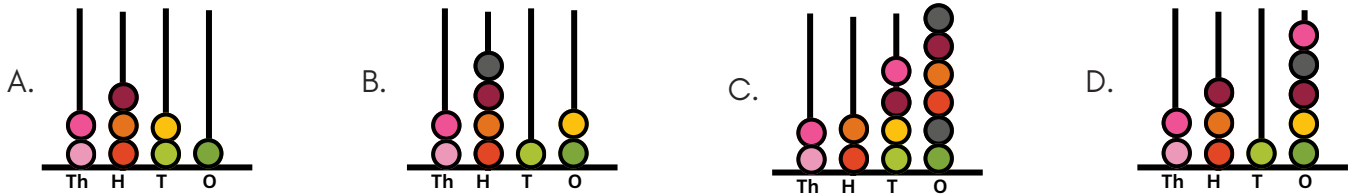
Worksheet 3



"Don't let what you cannot do interfere with what you can do." – John Wooden

1 2 3 4

1. Which of the following abacus shows the number less than 2315?




2. Which of the following number names belongs to the dog's number?

- A. Nine hundred and twenty seven
- B. Seven hundred and nine
- C. Seven hundred and twenty nine
- D. Nine hundred and seventy two



3. Study the house numbers of the following persons:



If the hundred's place and unit's place digits are interchanged in each house number, then whose house will have an even number address?

- A. Mr Kapoor
- B. Mr Malik
- C. Mr Sharma
- D. Mr Verma

4. Read the statement carefully and identify the number.



- It is a four-digit odd number whose unit place digit is 6 less than the thousands place digit.
- Its tens digit is the hundreds digit of $467 + 759$.
- Its hundreds digit is the tens digit of $1225 - 854$.
- Its thousands digit is the largest one-digit number.

- A. 9724
- B. 9726
- C. 9723
- D. 9275

5. The number name of the largest four-digit number that can be formed by using all the given cards (if repetition of digits is not allowed) is _____.

- A. Nine thousand six hundred and eighty-four
- B. Nine thousand eight hundred forty-six
- C. Nine thousand four hundred and eighty-six
- D. Nine thousand eight hundred and sixty-four



6. Find the missing number in the given number series.



- A. 55
- B. 65
- C. 70
- D. 60


7. Which of the following belongs to Group (X)?

A.  28

B.  40

C.  15

D.  8



Group (X)

8. If the unit place digit and thousands place digit are interchanged in each of the given numbers, then the smallest number will be _____.

9847

P

9857

Q

9887

R

9346

S

A. P

B. Q

C. R

D. S

9. Identify the number.

A. 668

B. 889

C. 448

D. 998

- I am a 3- digit number.
- Place value and face value of my ones digit number is 8.
- My first two digits form the largest-2-digit number.

BELIEVE YOURSELF



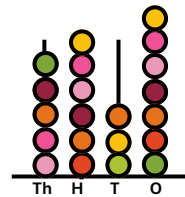
10. Which of the following options is 58 less than the number shown on the given abacus?

A. Five thousand five hundred ninety-seven

B. Five thousand five hundred seventy-nine

C. Five thousand five hundred fifty-eight

D. Five thousand five hundred seventy-nine





TM

MeandMath

BELIEVE YOURSELF

BOOST YOUR MATH PERFORMANCE WITH MeandMath



Our Premium Batches are 1:1, 1:2, 1:3 and 1:6 & another batch is 1: many batches.



Clear Doubts, Master Concepts, Excel with Confidence.



Learn on Your Schedule with Our Class Recordings.



Stay Ahead, Stay Sharp: Conquer Daily Homework Hassle-Free



Level Up Weekly: Ace Assessments with Confidence and Ease

Join Our Live Classes

**Preparing for the
Math Olympiad?**

Book Now >

Register to MnM Olympiad

**Want to test your
International Math
Rank?**

Register Here >

Visit meandmath.com to learn more about us.



TM

MeandMath

BELIEVE YOURSELF

A Roadmap to Brilliance

Our curriculum paves the way.

○ **Core** ○ **Advanced** ○ **Scholar**

Visit meandmath.com for further details on Curriculum.

“There are many paths to success in Math. We help all students discover theirs.”

Are you stuck, not sure how to solve math problem?

Want to Super Charge your Math skills with our World Class practice content!

Join our Homework Help Group!

[Join Now](#)



Subscribe today to get a resource to unlock the World of Wisdom!

[Subscribe Here](#)



Visit meandmath.com to learn more about us.