



Number Sense

Worksheet 4

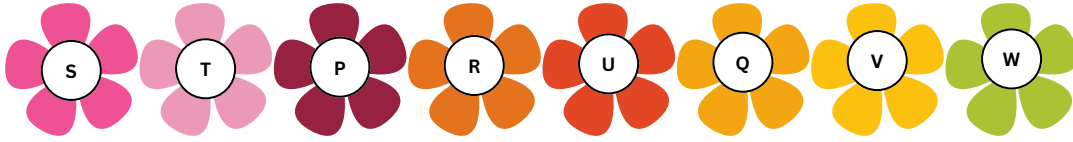


"A person who never made a mistake never tried anything new."

— Albert Einstein


1 2 3 4

1. If two flowers P and Q are removed from the given arrangement, then which flower is second to the right of fifth flower from the right end?




- A. Q B. U C. P D. R

2. Find the missing number in the given number series.




- A. 160 B. 170 C. 155 D. 150

3. Which of the following holds the least number?

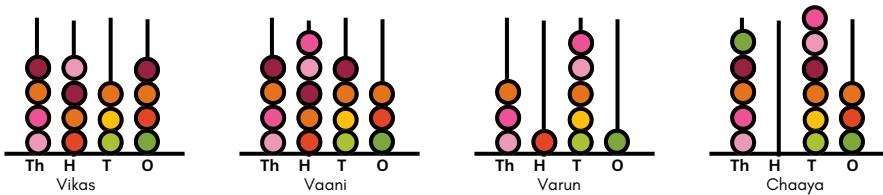


4. Which of the following numbers is written on the given screen?

- A. Eight hundred twenty-eight
 B. Six hundred thirty-eight
 C. Four hundred thirty-eight
 D. Seven hundred sixty-three



5. Four students put their favourite number on abacus.



Arrange the students in ascending order of their favourite numbers.

- A. Chaaya, Vaani, Vikas, Varun
 B. Vaani, Vikas, Chaaya, Varun
 C. Varun, Vikas, Vaani, Chaaya
 D. Vikas, Varun, Vaani, Chaaya

6. The number name of the smallest four digit even number that can be formed by using all the given digits (if repetition of digits is not allowed) is _____.

- A. Four thousand six hundred and ninety-eight
 B. Four thousand eight hundred and ninety-six
 C. Four thousand nine hundred and eighty-six
 D. Four thousand six hundred and eighty-nine





7. Shivam has two baskets full of some number tokens. He likes the numbers that are in the red basket. Which of the following numbers formed by using given basket numbers will he like the most?


- A. 8763
- B. 6529
- C. 7563
- D. 6958









8. Which of the following figures will replace the question mark (?) in the given figure matrix?

A. 

B. 

C. 

D. 

		
	?	

9. Identify the number using the given clues.

- It is an even number.
- The digit at tens place is the largest odd number.
- The digit at hundreds place is the remainder obtained when 56 divided by 7.
- The digit at tens place is thrice the digit at thousands place.

- A. 3094
- B. 3196
- C. 3095
- D. 6098

10. Identify the four digit number.



- Its ones digit is the smallest one digit odd number.
- Its hundreds digit is the ones digit of $96 + 12$.
- Its tens digit is 4 times its ones digit.
- Its thousands digit is two more than its tens digit

- A. 6841
- B. 6542
- C. 8641
- D. 9482



TM

MeandMath

BELIEVE YOURSELF

BOOST YOUR MATH PERFORMANCE WITH MeandMath



Our Premium Batches are 1:1, 1:2, 1:3 and 1:6 & another batch is 1: many batches.



Clear Doubts, Master Concepts, Excel with Confidence.



Learn on Your Schedule with Our Class Recordings.



Stay Ahead, Stay Sharp: Conquer Daily Homework Hassle-Free



Level Up Weekly: Ace Assessments with Confidence and Ease

Join Our Live Classes

**Preparing for the
Math Olympiad?**

Book Now >

Register to MnM Olympiad

**Want to test your
International Math
Rank?**

Register Here >

Visit meandmath.com to learn more about us.



TM

MeandMath

BELIEVE YOURSELF

A Roadmap to Brilliance

Our curriculum paves the way.

○ **Core** ○ **Advanced** ○ **Scholar**

Visit meandmath.com for further details on Curriculum.

“There are many paths to success in Math. We help all students discover theirs.”

Are you stuck, not sure how to solve math problem?

Want to Super Charge your Math skills with our World Class practice content!

Join our Homework Help Group!

[Join Now](#)



Subscribe today to get a resource to unlock the World of Wisdom!

[Subscribe Here](#)



Visit meandmath.com to learn more about us.