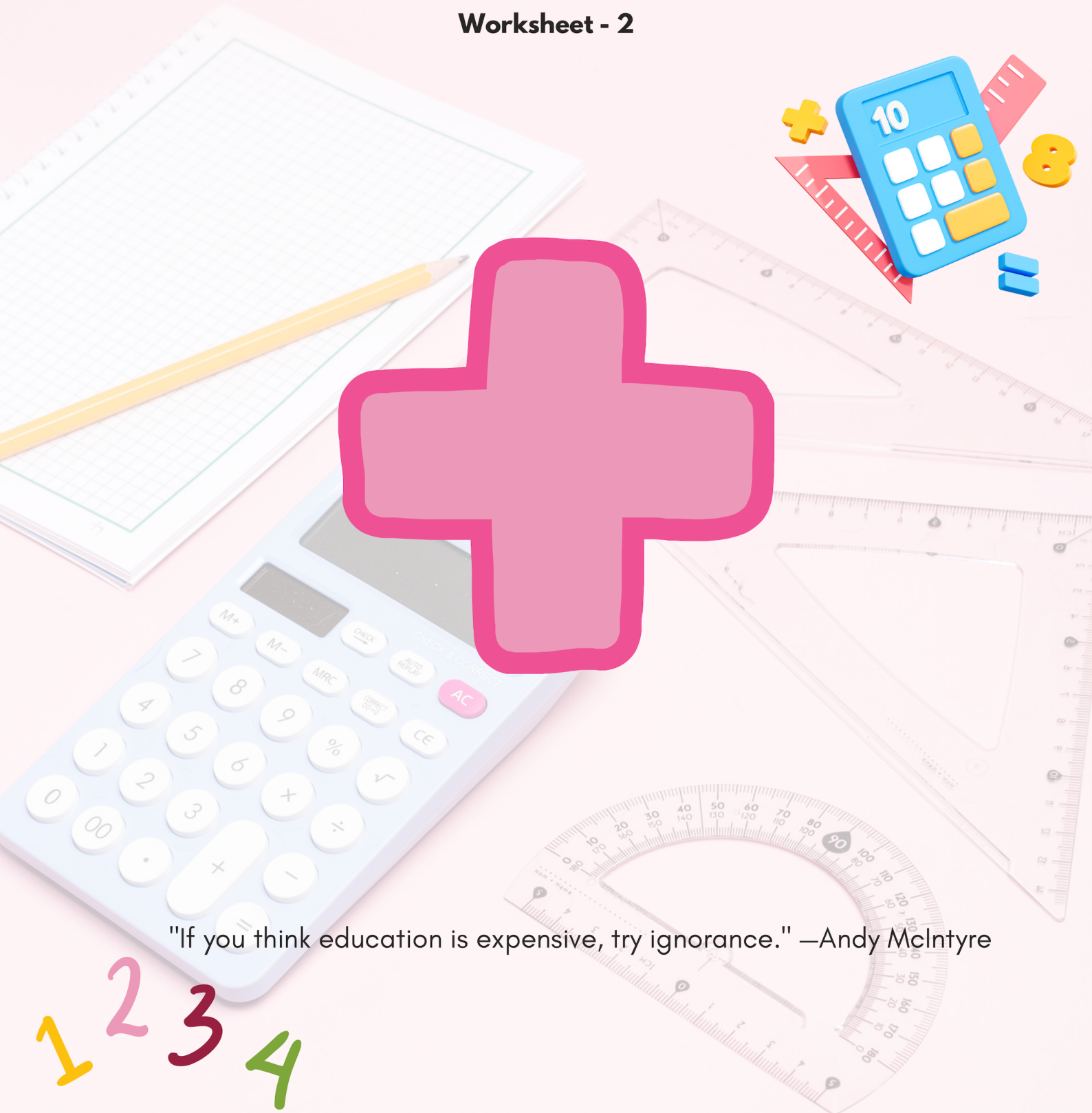




Addition

Worksheet - 2



"If you think education is expensive, try ignorance." –Andy McIntyre



1. Select the CORRECT match.

- A. Twenty five = 3 more than 28
- C. Thirty three = 3 more than 30

- B. Forty two = 2 less than 40
- D. Sixteen = 1 more than 17

2. Sam bought 7 mangoes. Trishu bought 5 more mangoes than Sam. How many mangoes did they buy altogether?

- A. 19
- B. 12
- C. 24
- D. 29

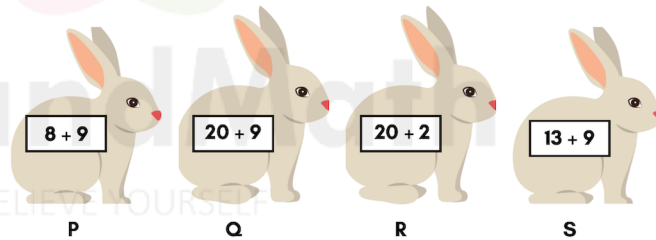
3. Find the sum of the greatest and the least number written on the house.

- A. 76
- B. 79
- C. 86
- D. 82



4. Arrange the rabbits from the greatest to the smallest.

- A. P, S, R, Q
- B. S, R, Q, P
- C. Q, S, R, P
- D. Q, R, S, P



5. Find the value of $X + Y$.

- A. 13
- B. 9
- C. 12
- D. 11

$$\begin{array}{r} 34 \\ + 6X \\ \hline Y7 \\ \hline \end{array}$$

6. Kaira has . Vanya has  more than Kaira. How many crowns do they have altogether?

- A. 9
 - B. 12
 - C. 10
 - D. 14
-

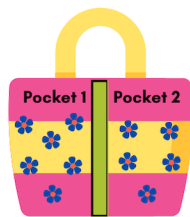
7. Arsh buys some stickers. He pastes 5 stickers in his notebook and gives 7 stickers to Sam. If Arsh has 3 stickers left, then how many stickers did he buy?

- A. 16 B. 15 C. 18 D. 17

8. Look at the given picture and fill in the blanks.

- Bag **P** contains maximum number of flowers.
- Total number of flowers in Pocket 2 of all three bags is **Q**.
- Bag 2 contains **R** less flowers than Bag 1 and 3 altogether.

	P	Q	R
A.	1	18	10
B.	3	18	12
C.	2	16	10
D.	3	18	6



Bag 1



Bag 2



Bag 3

9. Match the following.

Column 1

- P.
- Q.
- R.
- S.

Column 2

- 1.
- 2.
- 3.
- 4.

- A. P → 3, Q → 4, R → 2, S → 1 B. P → 3, Q → 4, R → 1, S → 2
- C. P → 4, Q → 3, R → 2, S → 1 D. P → 4, Q → 3, R → 1, S → 2

10. _____ is greater than twenty three.

- A. 2 ones + 3 ones B. 3 tens + 2 ones
- C. 20 ones + 3 ones D. 2 tens + 3 ones



TM

MeandMath

BELIEVE YOURSELF

BOOST YOUR MATH PERFORMANCE WITH MeandMath



Our Premium Batches are 1:1, 1:2, 1:3 and 1:6 & another batch is 1: many batches.



Clear Doubts, Master Concepts, Excel with Confidence.



Learn on Your Schedule with Our Class Recordings.



Stay Ahead, Stay Sharp: Conquer Daily Homework Hassle-Free



Level Up Weekly: Ace Assessments with Confidence and Ease

Join Our Live Classes

**Preparing for the
Math Olympiad?**

Book Now >

Register to MnM Olympiad

**Want to test your
International Math
Rank?**

Register Here >

Visit meandmath.com to learn more about us.



TM

MeandMath

BELIEVE YOURSELF

A Roadmap to Brilliance

Our curriculum paves the way.

○ **Core** ○ **Advanced** ○ **Scholar**

Visit meandmath.com for further details on Curriculum.

“There are many paths to success in Math. We help all students discover theirs.”

Are you stuck, not sure how to solve math problem?

Want to Super Charge your Math skills with our World Class practice content!

Join our Homework Help Group!

[Join Now](#)



Subscribe today to get a resource to unlock the World of Wisdom!

[Subscribe Here](#)



Visit meandmath.com to learn more about us.