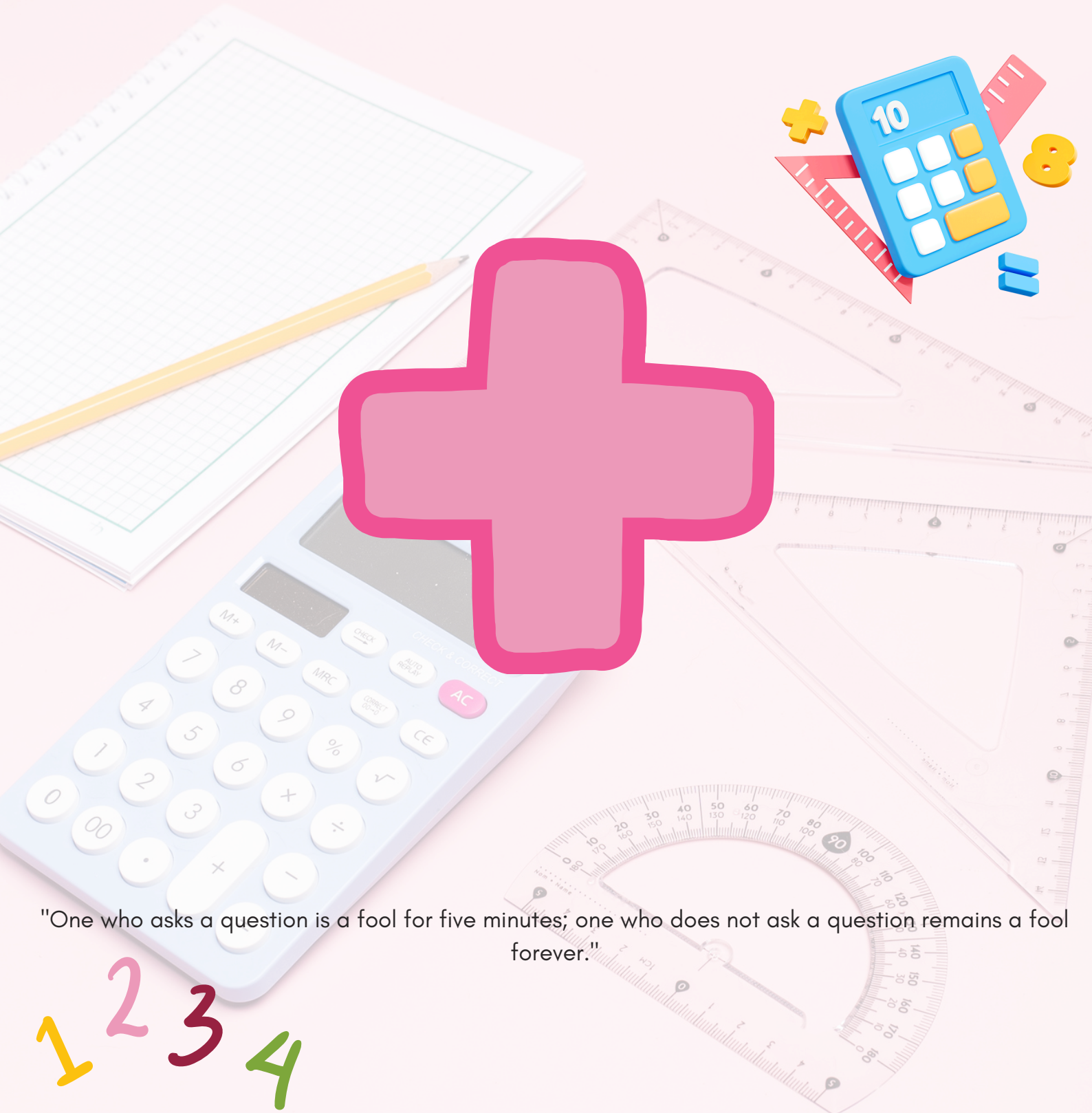






Addition

Worksheet - 3



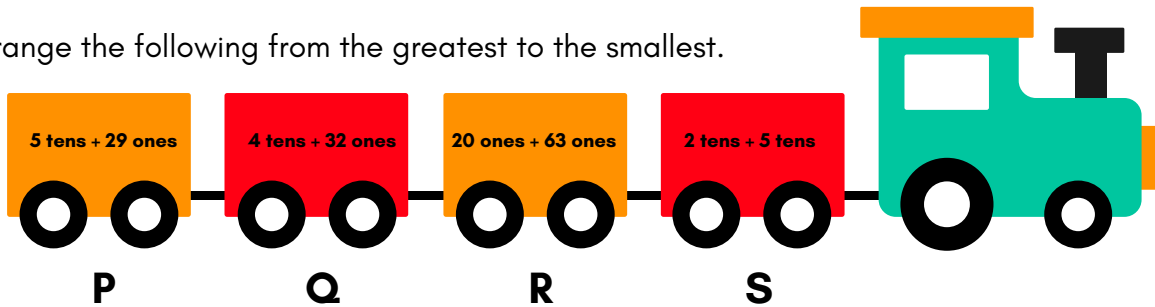
"One who asks a question is a fool for five minutes; one who does not ask a question remains a fool forever."

1 2 3 4

1. Reema has  , Meetu has  more than Reema. How many ice-creams do they have altogether?

- A. 19 B. 14 C. 18 D. 23

2. Arrange the following from the greatest to the smallest.



- A. R, P, Q, S B. R, Q, P, S C. S, Q, P, R D. S, P, Q, R

3. Which of the following umbrellas gives the sum less than 11?

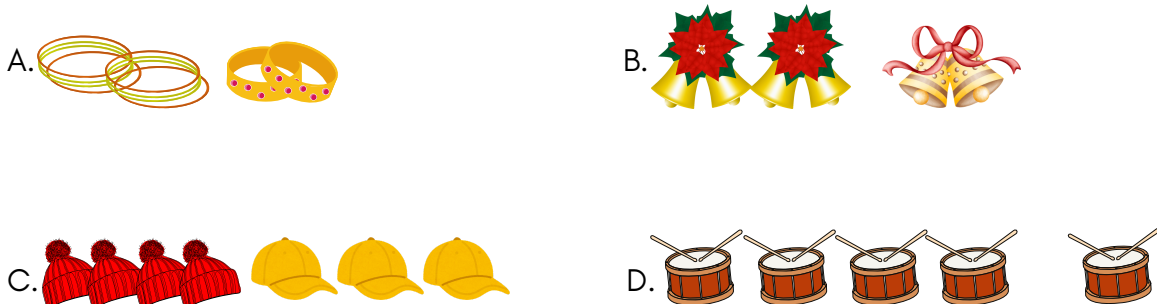


4. $11 + 3$ is shown by which abacus?



5. Which of the following best describes the given addition sentence?

$4 + 3$






6. Priyansh has 7  , 5  and 8  in his farm house. The total number of animals in his farm house is _____.

- A. 15 B. 20 C. 22 D. 18

7. Radhika sold 13 muffins on Monday, 16 muffins on Tuesday and 10 muffins on Saturday. She sold _____ muffins in all the three days together.

- A. 29 B. 38
C. 39 D. 40



8. If  = 22,  + 10 =  and

 +  + 11 =  , then  = _____.

- A. 45 B. 40 C. 68 D. 38

9. Shreya bought 12 cupcakes on Monday, 10 cupcakes on Tuesday and 34 cupcakes on Wednesday. How many cupcakes did she buy altogether?

- A. 58 B. 54 C. 56 D. 48

10. Find the value of P and Q respectively.

- A. 3, 1 B. 1, 1
C. 2, 1 D. 1, 3

$$\begin{array}{r}
 \boxed{P} \ 2 \\
 + \ 3 \ \boxed{Q} \\
 \hline
 4 \ 3 \\
 \hline
 \end{array}$$



TM

MeandMath

BELIEVE YOURSELF

BOOST YOUR MATH PERFORMANCE WITH MeandMath



Our Premium Batches are 1:1, 1:2, 1:3 and 1:6 & another batch is 1: many batches.



Clear Doubts, Master Concepts, Excel with Confidence.



Learn on Your Schedule with Our Class Recordings.



Stay Ahead, Stay Sharp: Conquer Daily Homework Hassle-Free



Level Up Weekly: Ace Assessments with Confidence and Ease

Join Our Live Classes

**Preparing for the
Math Olympiad?**

Book Now >

Register to MnM Olympiad

**Want to test your
International Math
Rank?**

Register Here >

Visit meandmath.com to learn more about us.



TM

MeandMath

BELIEVE YOURSELF

A Roadmap to Brilliance

Our curriculum paves the way.

○ **Core** ○ **Advanced** ○ **Scholar**

Visit meandmath.com for further details on Curriculum.

“There are many paths to success in Math. We help all students discover theirs.”

Are you stuck, not sure how to solve math problem?

Want to Super Charge your Math skills with our World Class practice content!

Join our Homework Help Group!

[Join Now](#)



Subscribe today to get a resource to unlock the World of Wisdom!

[Subscribe Here](#)



Visit meandmath.com to learn more about us.