



Addition

Worksheet - 4



"The expert in anything was once a beginner." —Helen Hayes

1 2 3 4

1. In a school, class-1 has 20



and 15






. What is the total number of students in class 1?

A. 38

B. 40

C. 35

D. 30

2. Sanchi saw 2 , 3  and 5  in a zoo. How many animals did she see in total?

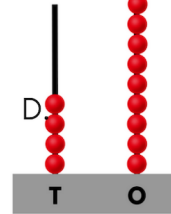
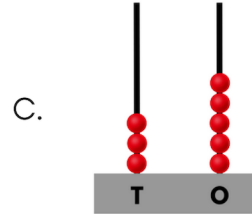
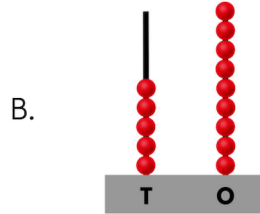
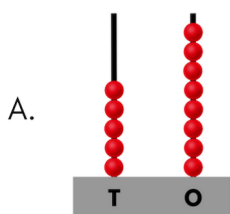
A. 8



B. 5

C. 12

D. 10

3. Which of the following abacuses shows 8 more than 51?



4. In school, there are 42  and 46 . There are _____ children in the school.

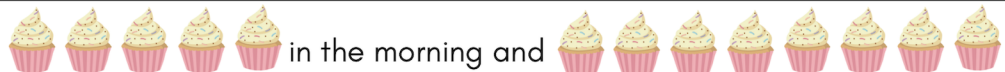
A. 78

B. 88

C. 68

D. 70

5. Mrs Priya made      in the morning and



in the evening. The total number of cupcakes she made is _____.

A. 15

B. 18

C. 10

D. 13

6. Find the value of $P + Q$.

A. 3

B. 4

C. 5

D. 6

$$\begin{array}{r} 2 \quad P \\ + \quad Q \quad 1 \\ \hline 5 \quad 4 \end{array}$$

7. Kavya has  . Sonali has  .
 Total number of capsicums they both have _____.

- A. 12 B. 15 C. 18 D. 25
-

8. There are only  and  in a farm. How many total birds are there in the farm?

- A. 14 B. 12 C. 9 D. 10
-

9. Select the CORRECT statement

- A. If 10 is added to 20, then the result will be 28.
 B. The number which lies between 28 and 30 is 29.
 C. 9 tens + 3 ones = 98
 D. 5 less than 98 is 9 tens 5 ones.
-

10. Match the following and select the CORRECT option.

Column 1



Column 2

1. 12



2. 18



3. 15

- A. 1 2 3
 B. 2 1 3
 C. 1 3 2
 D. 3 1 2
-



TM

MeandMath
BELIEVE YOURSELF

BOOST YOUR MATH PERFORMANCE WITH MeandMath



Our Premium Batches are 1:1, 1:2, 1:3 and 1:6 & another batch is 1: many batches.



Clear Doubts, Master Concepts, Excel with Confidence.



Learn on Your Schedule with Our Class Recordings.



Stay Ahead, Stay Sharp: Conquer Daily Homework Hassle-Free



Level Up Weekly: Ace Assessments with Confidence and Ease

Join Our Live Classes

**Preparing for the
Math Olympiad?**

Book Now >

Register to MnM Olympiad

**Want to test your
International Math
Rank?**

Register Here >

Visit meandmath.com to learn more about us.



TM

MeandMath

BELIEVE YOURSELF

A Roadmap to Brilliance

Our curriculum paves the way.

○ **Core** ○ **Advanced** ○ **Scholar**

Visit meandmath.com for further details on Curriculum.

“There are many paths to success in Math. We help all students discover theirs.”

Are you stuck, not sure how to solve math problem?

Want to Super Charge your Math skills with our World Class practice content!

Join our Homework Help Group!

[Join Now](#)



Subscribe today to get a resource to unlock the World of Wisdom!

[Subscribe Here](#)



Visit meandmath.com to learn more about us.