



Subtraction

Worksheet -1



"The way to get started is to quit talking and begin doing." —Walt Disney

1 2 3 4

1. Which of the following options is correct?

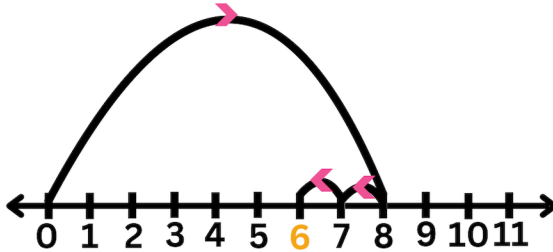
A. $14 - 3 = 11$

B. $9 - 0 = 0$

C. $12 - 2 = 0$

D. $7 - 1 = 8$

2. What does the number line represent?



A. $8 - 6 = 2$

B. $8 - 7 = 1$

C. $8 - 2 = 6$

D. $8 + 6 = 14$

3. If Rajeev removes 4 bottles from the given bottles, then the remaining number of bottles will be _____.



A. 28

B. 22

C. 16

D. 24

4. There were 12 birds sitting on the branch of a tree. How many flew away if 4 birds are left on the branch?



A. 9

B. 7

C. 8

D. 6

5. Meera bought 16 books. Kara bought 48 books. How many less books did Meera buy than Kara?

A. 29

B. 48

C. 64

D. 32

6. Aliya bought 25 eggs. Kunal bought 12 eggs less than Aliya. How many eggs did Kunal buy?


A. 15

B. 31

C. 13


D. 32

7. How many more flowers should be ✕ to show the given subtraction sentence?
'22 - 16'



- A. 3 B. 4 C. 2 D. 1

8. Which subtraction sentence shows the given picture?




- A. 26 - 14
B. 26 - 12
C. 17 - 14
D. 27 - 12


9. If $5 + \text{candy} = 9$, $\text{lollipop} + \text{candy} = 14$, then $\text{lollipop} - \text{candy} = \text{---} ? \text{---}$.

- A. 7 B. 8 C. 6 D. 5


10. Select the CORRECT statement.




Reeti



Reetu



Reeta



Reema

- A. The difference between the number of apples of Reeti and Reetu is 8.
B. The difference between the number of apples of Reetu and Reeta is 4.
C. The difference between the number of apples of Reema and Reetu is 7.
D. The difference between the number of apples of Reeti and Reeta is 2.



TM

MeandMath

BELIEVE YOURSELF

BOOST YOUR MATH PERFORMANCE WITH MeandMath



Our Premium Batches are 1:1, 1:2, 1:3 and 1:6 & another batch is 1: many batches.



Clear Doubts, Master Concepts, Excel with Confidence.



Learn on Your Schedule with Our Class Recordings.



Stay Ahead, Stay Sharp: Conquer Daily Homework Hassle-Free



Level Up Weekly: Ace Assessments with Confidence and Ease

Join Our Live Classes

**Preparing for the
Math Olympiad?**

Book Now >

Register to MnM Olympiad

**Want to test your
International Math
Rank?**

Register Here >

Visit meandmath.com to learn more about us.



TM

MeandMath

BELIEVE YOURSELF

A Roadmap to Brilliance

Our curriculum paves the way.

○ **Core** ○ **Advanced** ○ **Scholar**

Visit meandmath.com for further details on Curriculum.

“There are many paths to success in Math. We help all students discover theirs.”

Are you stuck, not sure how to solve math problem?

Want to Super Charge your Math skills with our World Class practice content!

Join our Homework Help Group!

[Join Now](#)



Subscribe today to get a resource to unlock the World of Wisdom!

[Subscribe Here](#)



Visit meandmath.com to learn more about us.