



Subtraction

Worksheet-5



"Teachers can open the door, but you must enter it yourself."

1 2 3 4

1. Which of the following is the CORRECT subtraction sentence for the given picture?



A. $8 - 4$

B. $8 - 3$

C. $5 - 3$

D. $8 - 2$

2. The difference between the greatest and the smallest number on the given bulb is


_____.

A. 35

B. 32

C. 27

D. 29



3. Manisha had  and . He gave  and  to his sister. How many balloons are left with him?

A. 8

B. 4

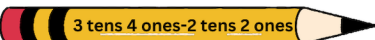
C. 6

D. 7

4. Match the following and select the correct option.

Column A

P  2 tens 4 ones-11 ones

Q  3 tens 4 ones-2 tens 2 ones

R  4 tens-20 ones

Column B

1  12

2  20

3  13

A. P-(2); Q-(1); R-(3)


C. P-(3); Q-(1); R-(2)

B. P-(1); Q-(2); R-(3)

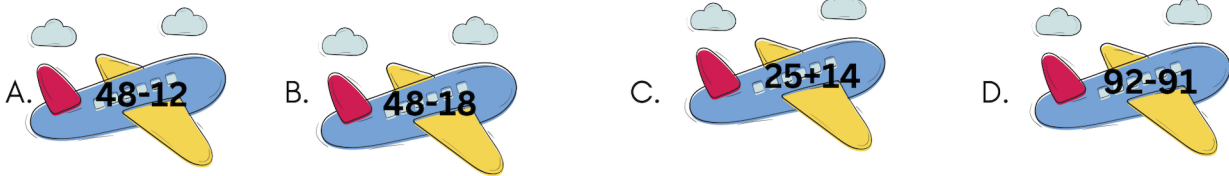
D. P-(3); Q(2); R-(1)


5. The difference between the greatest and the smallest number given on the balls is _____.

- A. 40
- B. 68
- C. 80
- D. 74



6. Which of the following is greater than 36?



7. In a school, there are 100 children out of which 60 students come to school by . How many students come to school by other vehicles?

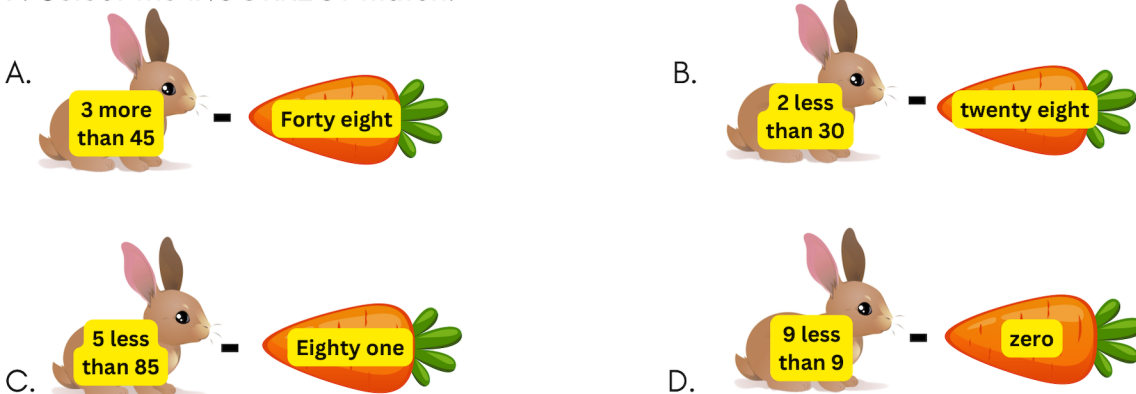
- A. 30
- B. 40
- C. 50
- D. 70

8. Some squirrels are sitting on the branch of a tree. If 3 of them went away, then _____ squirrels are left.

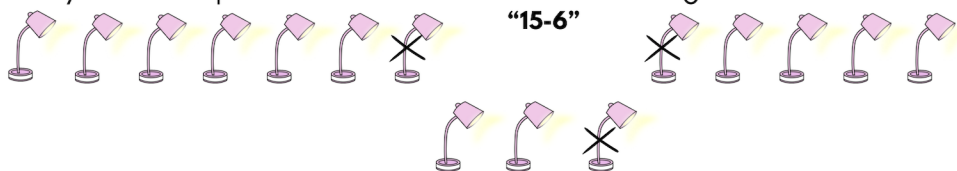
- A. 3
- B. 5
- C. 6
- D. 4



9. Select the INCORRECT match.



10. How many more lamps should be crossed to make the given subtraction sentence TRUE?



- A. 3
- B. 4
- C. 5
- D. 6



TM

MeandMath

BELIEVE YOURSELF

BOOST YOUR MATH PERFORMANCE WITH MeandMath



Our Premium Batches are 1:1, 1:2, 1:3 and 1:6 & another batch is 1: many batches.



Clear Doubts, Master Concepts, Excel with Confidence.



Learn on Your Schedule with Our Class Recordings.



Stay Ahead, Stay Sharp: Conquer Daily Homework Hassle-Free



Level Up Weekly: Ace Assessments with Confidence and Ease

Join Our Live Classes

**Preparing for the
Math Olympiad?**

Book Now >

Register to MnM Olympiad

**Want to test your
International Math
Rank?**

Register Here >

Visit meandmath.com to learn more about us.



TM

MeandMath

BELIEVE YOURSELF

A Roadmap to Brilliance

Our curriculum paves the way.

○ **Core** ○ **Advanced** ○ **Scholar**

Visit meandmath.com for further details on Curriculum.

“There are many paths to success in Math. We help all students discover theirs.”

Are you stuck, not sure how to solve math problem?

Want to Super Charge your Math skills with our World Class practice content!

Join our Homework Help Group!

[Join Now](#)



Subscribe today to get a resource to unlock the World of Wisdom!

[Subscribe Here](#)



Visit meandmath.com to learn more about us.