



Addition

Worksheet-1




WHAT YOU LEARN IS YOURS FOREVER.



1. What is the sum of numbers in the house?

- A. 92
- B. 94
- C. 96
- D. 98



2. Most suitable addition sentence for the given figure is _____.

- A. $7 + 7 + 7 + 7 + 7$
- B. $7 + 7 + 7$
- C. $4 + 4 + 4 + 4$
- D. $7 + 7 + 7 + 7$



3. Sum of 25 tens and 13 more than 146 ones is _____.

- A. 409
- B. 990
- C. 490
- D. 492

4. Meetu sold 413 kites in the first week of a month. If in the second week, 159 more kites were sold than the first week, then how many kites were sold in the 2 weeks altogether?

- A. 985
- B. 895
- C. 559
- D. 572

5. Arnav had some toy cars. After selling 693 toy cars, he is left with 47 toys cars. The number of toy cars he had at first was _____.

- A. 740
- B. 470
- C. 744
- D. 477

6. If  +  +  +  +  = 96 and  = 12, then find the value of  + .




- A. 30
- B. 42
- C. 26
- D. 28

7. Payal scored 54 points in a quiz. Raj scored 14 points more than Payal. The total points scored by Raj and Payal together are _____.

- A. 99
- B. 90
- C. 122
- D. 89

8. Karan had some chocolates. He gave 43 chocolates to his sister and was left with 28 chocolates. How many chocolates did Karan have at the beginning?

- A. 15
- B. 78
- C. 71
- D. 50

9. If  +  +  = 42 and  = 12, then the value of  is _____.


- A. 12
- B. 33
- C. 13
- D. 18

10. Study the given figures and answer the following question.

$$\text{Candy} + \text{Candy} + \text{Burger} + \text{Burger} + \text{Burger} = ₹ 85$$

$$\text{Chocolate} + \text{Chocolate} + \text{Candy} = ₹ 49 \text{ and}$$

$$\text{Burger} = ₹ 25$$

Find the cost of 

A. ₹44

B. ₹22

C. ₹32

D. ₹11

MeandMath

BELIEVE YOURSELF



TM

MeandMath

BELIEVE YOURSELF

BOOST YOUR MATH PERFORMANCE WITH MeandMath



Our Premium Batches are 1:1, 1:2, 1:3 and 1:6 & another batch is 1: many batches.



Clear Doubts, Master Concepts, Excel with Confidence.



Learn on Your Schedule with Our Class Recordings.



Stay Ahead, Stay Sharp: Conquer Daily Homework Hassle-Free



Level Up Weekly: Ace Assessments with Confidence and Ease

Join Our Live Classes

**Preparing for the
Math Olympiad?**

Book Now >

Register to MnM Olympiad

**Want to test your
International Math
Rank?**

Register Here >

Visit meandmath.com to learn more about us.



TM

MeandMath

BELIEVE YOURSELF

A Roadmap to Brilliance

Our curriculum paves the way.

○ **Core** ○ **Advanced** ○ **Scholar**

Visit meandmath.com for further details on Curriculum.

“There are many paths to success in Math. We help all students discover theirs.”

Are you stuck, not sure how to solve math problem?

Want to Super Charge your Math skills with our World Class practice content!

Join our Homework Help Group!

[Join Now](#)



Subscribe today to get a resource to unlock the World of Wisdom!

[Subscribe Here](#)



Visit meandmath.com to learn more about us.