



Multiplication

Worksheet - 1



THE EXPERT IN ANYTHING WAS ONCE A BEGINNER.




1. Most suitable multiplication sentence for the given picture is _____.

- A. 4×2
- B. 7×4
- C. 4×4
- D. 7×7



2. Amit bought 3 baskets of mangoes like the one shown in the figure. Find the number of mangoes bought by him.

- A. 15
- B. 21
- C. 18
- D. 20

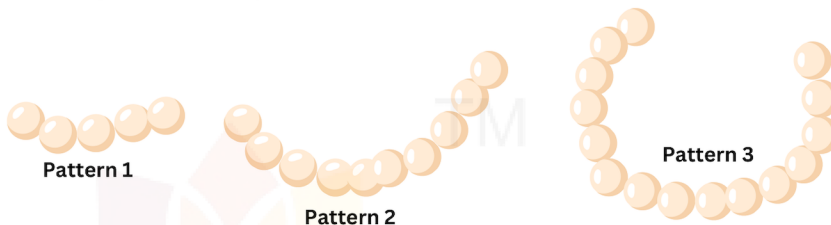


3. There are 6 apples hanging on one tree. How many apples are there on 7 such trees?

- A. 35
- B. 42
- C. 28
- D. 50


4. Study the patterns 1, 2 and 3. Using the same pattern, tell the number of beads in Pattern 5.

- A. 20
- B. 25
- C. 30
- D. 35




5. There were five cows in a farm. How many cow-legs were there altogether?

- A. 15
- B. 18
- C. 12
- D. 20



6. Which of the following number sentence is most suitable for the given picture?

- A. $3 + 3 + 3 + 3$
- B. $3 + 3 + 3 + 3 + 3 + 3$
- C. $3 + 3 + 3 + 3 + 3$
- D. $5 + 5 + 5 + 5$




7. Raman saw 4 lions in the zoo. How many lion legs did he see altogether?

- A. 16
- B. 20
- C. 12
- D. 25



8. If there are 16 apples on a tree, then how many apples are there on 3 such trees?

- A. 48
- B. 42
- C. 32
- D. 64



9. Priya drinks 8 litres of water every day. How many litres of water did she drink in 5 days?

- A. 40 litres
- B. 42 litres
- C. 32 litres
- D. 24 litres

10. Read the clues given below.

Rajat went to the zoo in the morning with his friend Prateek. While he was crossing, he saw two lions sleeping in the cage. further he saw 2 deer eating grass in their cage and in another cage, he saw a monkey eating banana. He returned back in the evening with his friend.

How many legs did Rajat and Prateek see altogether?

- A. 20
 - B. 24
 - C. 32
 - D. 28
-



TM

MeandMath

BELIEVE YOURSELF

BOOST YOUR MATH PERFORMANCE WITH MeandMath



Our Premium Batches are 1:1, 1:2, 1:3 and 1:6 & another batch is 1: many batches.



Clear Doubts, Master Concepts, Excel with Confidence.



Learn on Your Schedule with Our Class Recordings.



Stay Ahead, Stay Sharp: Conquer Daily Homework Hassle-Free



Level Up Weekly: Ace Assessments with Confidence and Ease

Join Our Live Classes

**Preparing for the
Math Olympiad?**

Book Now >

Register to MnM Olympiad

**Want to test your
International Math
Rank?**

Register Here >

Visit meandmath.com to learn more about us.



TM

MeandMath

BELIEVE YOURSELF

A Roadmap to Brilliance

Our curriculum paves the way.

○ **Core** ○ **Advanced** ○ **Scholar**

Visit meandmath.com for further details on Curriculum.

“There are many paths to success in Math. We help all students discover theirs.”

Are you stuck, not sure how to solve math problem?

Want to Super Charge your Math skills with our World Class practice content!

Join our Homework Help Group!

[Join Now](#) >

Subscribe today to get a resource to unlock the World of Wisdom!

[Subscribe Here](#) >

Visit meandmath.com to learn more about us.