



Fractions

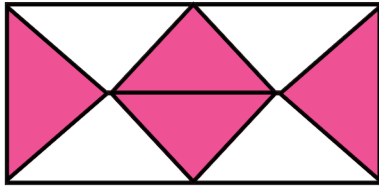
Worksheet-1



ALWAYS KEEP A POSITIVE MINDSET.

1 2 3 4

1. What fraction of the figure is shaded?



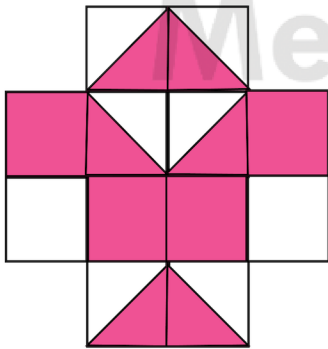
A. $\frac{4}{8}$

B. $\frac{3}{8}$

C. $\frac{6}{8}$

D. $\frac{8}{8}$

2. What fraction of the figure is shaded?



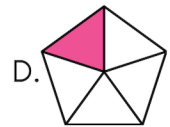
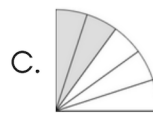
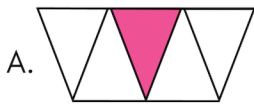
A. $\frac{11}{24}$

B. $\frac{14}{24}$

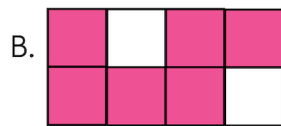
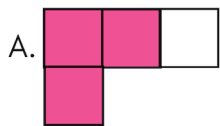
C. $\frac{13}{24}$

D. $\frac{18}{24}$


3. Which of these figure has $\frac{1}{5}$ part unshaded?



4. Which of the following figure is $\frac{6}{8}$ shaded?



5. What fraction of the given shape is NOT shaded?




A. $\frac{5}{7}$

B. $\frac{7}{12}$

C. $\frac{5}{12}$

D. 7

6. What fraction of the given shape is shaded?





A. $\frac{1}{2}$

B. $\frac{2}{3}$

C. $\frac{3}{2}$

D. $\frac{3}{1}$

7. If  is one whole, what fraction of the whole is  ?

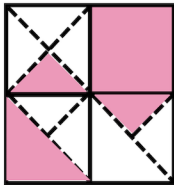
A. $\frac{1}{6}$

B. $\frac{1}{3}$

C. $\frac{1}{2}$

D. $\frac{1}{5}$

8. What fraction of the square is shaded?



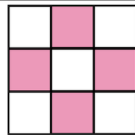
A. $\frac{4}{11}$

B. $\frac{7}{4}$

C. $\frac{8}{16}$

D. $\frac{3}{4}$

9. What fraction of the figure is NOT shaded?



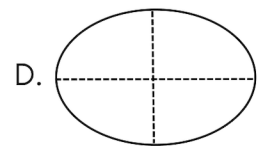
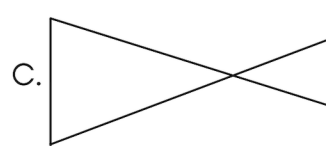
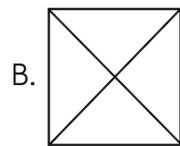
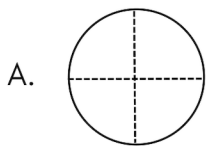
A. $\frac{4}{9}$

B. $\frac{5}{9}$

C. $\frac{4}{5}$

D. $\frac{5}{5}$

10. Find the figure that is different from the rest.





TM

MeandMath

BELIEVE YOURSELF

BOOST YOUR MATH PERFORMANCE WITH MeandMath



Our Premium Batches are 1:1, 1:2, 1:3 and 1:6 & another batch is 1: many batches.



Clear Doubts, Master Concepts, Excel with Confidence.



Learn on Your Schedule with Our Class Recordings.



Stay Ahead, Stay Sharp: Conquer Daily Homework Hassle-Free



Level Up Weekly: Ace Assessments with Confidence and Ease

Join Our Live Classes

**Preparing for the
Math Olympiad?**

Book Now >

Register to MnM Olympiad

**Want to test your
International Math
Rank?**

Register Here >

Visit meandmath.com to learn more about us.



TM

MeandMath

BELIEVE YOURSELF

A Roadmap to Brilliance

Our curriculum paves the way.

○ **Core** ○ **Advanced** ○ **Scholar**

Visit meandmath.com for further details on Curriculum.

“There are many paths to success in Math. We help all students discover theirs.”

Are you stuck, not sure how to solve math problem?

Want to Super Charge your Math skills with our World Class practice content!

Join our Homework Help Group!

[Join Now](#) ➔

Subscribe today to get a resource to unlock the World of Wisdom!

[Subscribe Here](#) ➔

Visit meandmath.com to learn more about us.