



Fractions

Worksheet-3

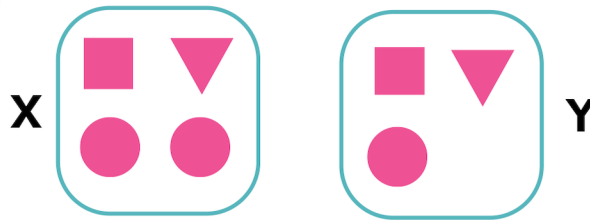


DO NOT JUST DREAM BUT ALSO WORK FOR YOUR SUCCESS.

1 2 3 4

1. Which Figure has $\frac{1}{2}$ of its shapes as Circle?

- A. X
- B. Y
- C. Both are equal
- D. None of these



2. What fraction of the rectangle is shaded blue?



- A. $\frac{1}{3}$
- B. $\frac{1}{4}$
- C. $\frac{1}{2}$
- D. $\frac{2}{3}$

3. What fraction of the toys is ball?



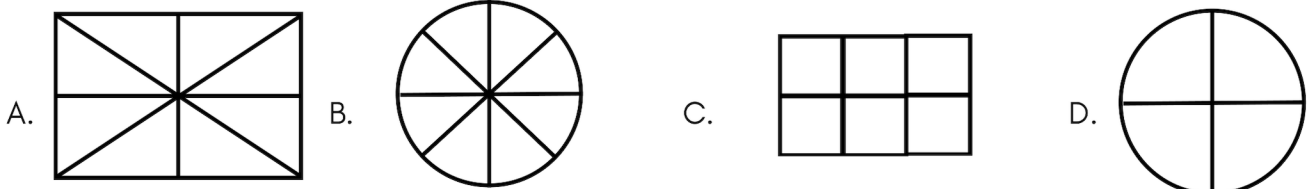
- A. $\frac{5}{8}$
- B. $\frac{1}{5}$
- C. $\frac{3}{8}$
- D. $\frac{1}{3}$

4. Count all the airplanes shown in the picture. Which option below shows one-fourth of the airplanes?

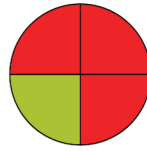


- A. 4 Airplanes
- B. 6 Airplanes
- C. 3 Airplanes
- D. 5 Airplanes

5. Which shape shows sixths?



6. What fraction of the circle is shaded red?



A. $\frac{1}{4}$

B. $\frac{1}{5}$

C. $\frac{2}{3}$

D. $\frac{3}{4}$

7. What fraction of the cups is green?



A. $\frac{1}{3}$

B. $\frac{3}{4}$

C. $\frac{1}{4}$

D. $\frac{1}{2}$

8. Which fraction is the greatest?


A. $\frac{1}{3}$

B. $\frac{3}{4}$

C. $\frac{1}{4}$

D. $\frac{1}{5}$

9. What fraction of the balloons is pink?



A. $\frac{1}{2}$

B. $\frac{1}{3}$

C. $\frac{1}{4}$

D. $\frac{1}{5}$

10. Which sign will make the following number sentence CORRECT?

$$\frac{1}{2} \square \frac{1}{3}$$

A. >

B. <

C. =

D. None of these



TM

MeandMath

BELIEVE YOURSELF

BOOST YOUR MATH PERFORMANCE WITH MeandMath



Our Premium Batches are 1:1, 1:2, 1:3 and 1:6 & another batch is 1: many batches.



Clear Doubts, Master Concepts, Excel with Confidence.



Learn on Your Schedule with Our Class Recordings.



Stay Ahead, Stay Sharp: Conquer Daily Homework Hassle-Free



Level Up Weekly: Ace Assessments with Confidence and Ease

Join Our Live Classes

**Preparing for the
Math Olympiad?**

Book Now >

Register to MnM Olympiad

**Want to test your
International Math
Rank?**

Register Here >

Visit meandmath.com to learn more about us.



TM

MeandMath

BELIEVE YOURSELF

A Roadmap to Brilliance

Our curriculum paves the way.

○ **Core** ○ **Advanced** ○ **Scholar**

Visit meandmath.com for further details on Curriculum.

“There are many paths to success in Math. We help all students discover theirs.”

Are you stuck, not sure how to solve math problem?

Want to Super Charge your Math skills with our World Class practice content!

Join our Homework Help Group!

[Join Now](#) >

Subscribe today to get a resource to unlock the World of Wisdom!

[Subscribe Here](#) >

Visit meandmath.com to learn more about us.