



Fractions

Worksheet-4



DO NOT GET DISCOURAGED BUT KEEP TRYING.

1 2 3 4

1. Nisha planted 5 Tulips and 5 Marigold plants in her garden. What fraction of the plants was Marigold?

A. $\frac{1}{4}$

B. $\frac{1}{2}$

C. $\frac{1}{5}$

D. $\frac{2}{5}$

2. Which shape has half of the portion shaded pink?

Shape A



Shape B



Shape C



Shape D



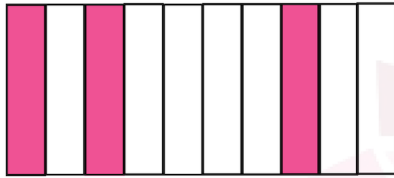
A. Shape "A" only

B. Shape "B" only

C. Shape "D" only

D. Shape "B" and Shape "C"

3. What fraction of the shape shows below is shaded pink?





A. $\frac{1}{10}$

B. $\frac{4}{9}$

C. $\frac{1}{2}$

D. $\frac{3}{10}$

4. Which circle shows two halves?



A. Green circle

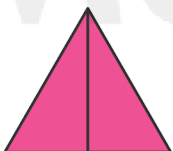
B. Blue circle

C. Red circle

D. None of these

5. Which shape shows four-fourths?


A.




B.




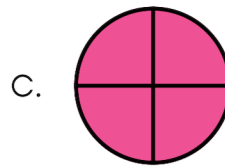
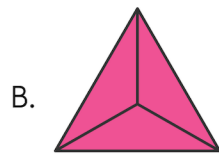
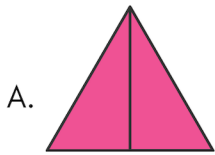
C.



D.



6. Which shape shows three-thirds?



7. Sanjay had 6 lollypops. He ate 2 and gave rest to his brother Rishabh. What fraction of the lollypops did Rishabh get?

A. $\frac{2}{6}$

B. $\frac{2}{4}$

C. $\frac{1}{6}$

D. $\frac{4}{6}$

8. There are 22 children in my class. Half of the class is bus riders, and the rest are car riders. How many children are bus riders?


A. 12

B. 15

C. 16

D. 11

9. There were four balloons in the store. Three balloons were pink, and one balloon was green. What fraction of the balloons was green?




A. $\frac{1}{2}$

B. $\frac{1}{3}$

C. $\frac{1}{4}$

D. $\frac{3}{4}$

10. There were four balloons in a store. Three balloons were red and one balloon was green. What fraction of the balloons was pink?



A. $\frac{1}{2}$

B. $\frac{1}{3}$

C. $\frac{1}{4}$

D. $\frac{3}{4}$



TM

MeandMath

BELIEVE YOURSELF

BOOST YOUR MATH PERFORMANCE WITH MeandMath



Our Premium Batches are 1:1, 1:2, 1:3 and 1:6 & another batch is 1: many batches.



Clear Doubts, Master Concepts, Excel with Confidence.



Learn on Your Schedule with Our Class Recordings.



Stay Ahead, Stay Sharp: Conquer Daily Homework Hassle-Free



Level Up Weekly: Ace Assessments with Confidence and Ease

Join Our Live Classes

**Preparing for the
Math Olympiad?**

Book Now >

Register to MnM Olympiad

**Want to test your
International Math
Rank?**

Register Here >

Visit meandmath.com to learn more about us.



TM

MeandMath

BELIEVE YOURSELF

A Roadmap to Brilliance

Our curriculum paves the way.

○ **Core** ○ **Advanced** ○ **Scholar**

Visit meandmath.com for further details on Curriculum.

“There are many paths to success in Math. We help all students discover theirs.”

Are you stuck, not sure how to solve math problem?

Want to Super Charge your Math skills with our World Class practice content!

Join our Homework Help Group!

[Join Now](#)



Subscribe today to get a resource to unlock the World of Wisdom!

[Subscribe Here](#)



Visit meandmath.com to learn more about us.