



Fractions

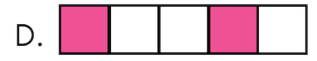


Worksheet-5



FAILURE IS NOT OPPOSITE TO SUCCESS BUT A PART OF IT.

1 2 3 4

1. Which shape is shaded $\frac{3}{4}$?



2. Shweta made 7 stars and colored 3 of them with pink paint. What fraction of the stars was painted pink?




A. $\frac{7}{3}$

B. $\frac{3}{7}$

C. $\frac{1}{2}$

D. $\frac{4}{7}$

3. What fraction of the shape is shaded pink?



A. $\frac{2}{3}$

B. $\frac{3}{5}$

C. $\frac{1}{2}$

D. $\frac{2}{5}$

4. How many thirds make a whole?

A. 1

B. 3

C. 4

D. 2

5. What fraction of the squares on the picture has boys?



A. $\frac{2}{9}$

B. $\frac{3}{9}$

C. $\frac{4}{9}$

D. $\frac{1}{9}$

6. What is $\frac{1}{3}$ of 15?

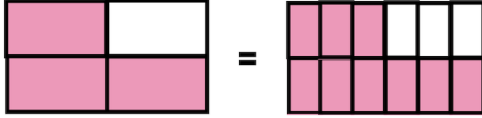
A. 3

B. 5

C. 6

D. 10

7. Use the diagram below to tell which fraction is equivalent to $\frac{3}{4}$?



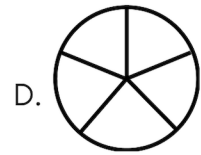
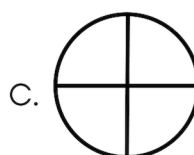
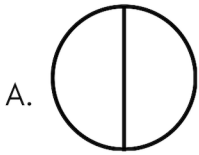
A. $\frac{9}{10}$

B. $\frac{6}{12}$

C. $\frac{6}{8}$

D. $\frac{9}{12}$

8. Ashraf ordered a pizza for himself and 3 of his friends. Which option shows how Ashraf needs to cut the pizza so that every one gets an equal amount of pizza?



9. What is the best way to describe how this kite has been divided?



A. whole

B. halves

C. thirds

D. fourths

10. Suresh cuts a cake into 5 pieces. He gives 3 pieces to his sister and eats the rest. What fraction of the cake did Suresh eat?

A. $\frac{1}{4}$

B. $\frac{1}{5}$

C. $\frac{2}{5}$

D. $\frac{3}{5}$



TM

MeandMath

BELIEVE YOURSELF

BOOST YOUR MATH PERFORMANCE WITH MeandMath



Our Premium Batches are 1:1, 1:2, 1:3 and 1:6 & another batch is 1: many batches.



Clear Doubts, Master Concepts, Excel with Confidence.



Learn on Your Schedule with Our Class Recordings.



Stay Ahead, Stay Sharp: Conquer Daily Homework Hassle-Free



Level Up Weekly: Ace Assessments with Confidence and Ease

Join Our Live Classes

**Preparing for the
Math Olympiad?**

Book Now



Register to MnM Olympiad

**Want to test your
International Math
Rank?**

Register Here



Visit meandmath.com to learn more about us.



TM

MeandMath
BELIEVE YOURSELF

A Roadmap to Brilliance

Our curriculum paves the way.

○ **Core** ○ **Advanced** ○ **Scholar**

Visit meandmath.com for further details on Curriculum.

“There are many paths to success in Math. We help all students discover theirs.”

Are you stuck, not sure how to solve math problem?

Want to Super Charge your Math skills with our World Class practice content!

Join our Homework Help Group!

[Join Now](#) >

Subscribe today to get a resource to unlock the World of Wisdom!

[Subscribe Here](#) >

Visit meandmath.com to learn more about us.