



# Division

## Worksheet-1




**THE FIRST STEP IS YOU HAVE TO SAY YOU CAN.**



1. A saleswoman wants to pack 99 baby corns in the boxes as shown. How many such boxes are required to pack all the baby corns?

- A. 9
- B. 10
- C. 21
- D. 12



2. Kavita has 26 marbles. If she kept 4 marbles in each of the given jars, then how many marbles are left with her?



- A. 2
- B. 0
- C. 5
- D. 6

3. There are \_\_\_\_\_ equal groups of 4 mangoes each.



- A. 3
- B. 4
- C. 5
- D. 6

4. Sandhya has a bunch of 21 flowers. If she can put 3 flowers in one vase, then how many vases does she need?

- A. 6
- B. 8
- C. 5
- D. 7




5. How many packets of 9 crayons did Parul buy if she bought a total 36 crayons?





- A. 5
- B. 6
- C. 3
- D. 4

6. A shopkeeper sells given trays of eggs in one day. If he sells same number of eggs everyday, then he will sell 72 eggs in \_\_\_\_\_ days.



- A. 5
- B. 6
- C. 3
- D. 4

7. If  stands for 32, then  stands for \_\_\_\_\_.

A. 4

B. 6

C. 7

D. 8

---

8. Kunal has ₹ 108. If he distributes the money equally amongst 3 of his friends, then how much amount will each get?

A. ₹ 36

B. ₹ 27

C. ₹ 18

D. ₹ 24

---

9. A shopkeeper has 7 bags of sugar. The total weight of all the bags is 42 kg. What is the weight of each bag of sugar, if all the bags are of same weight?

A. 7 kg


B. 5 kg

C. 8 kg

D. 6 kg

---

10. \_\_\_\_\_ groups of 9 tomatoes each can be formed from the given tomatoes.



A. 2

B. 4

C. 6

D. 3

---

# MeandMath

BELIEVE YOURSELF



TM

**MeandMath**

BELIEVE YOURSELF

# BOOST YOUR MATH PERFORMANCE WITH MeandMath



Our Premium Batches are 1:1, 1:2, 1:3 and 1:6 & another batch is 1: many batches.



Clear Doubts, Master Concepts, Excel with Confidence.



Learn on Your Schedule with Our Class Recordings.



Stay Ahead, Stay Sharp: Conquer Daily Homework Hassle-Free



Level Up Weekly: Ace Assessments with Confidence and Ease

## Join Our Live Classes

**Preparing for the  
Math Olympiad?**

Book Now >

## Register to MnM Olympiad

**Want to test your  
International Math  
Rank?**

Register Here >

Visit [meandmath.com](https://meandmath.com) to learn more about us.



TM

**MeandMath**

BELIEVE YOURSELF

# A Roadmap to Brilliance

Our curriculum paves the way.

○ **Core**      ○ **Advanced**      ○ **Scholar**

Visit [meandmath.com](https://meandmath.com) for further details on Curriculum.

*“There are many paths to success in Math. We help all students discover theirs.”*

**Are you stuck, not sure how to solve math problem?**

**Want to Super Charge your Math skills with our World Class practice content!**

**Join our Homework Help Group!**

[Join Now](#)



**Subscribe today to get a resource to unlock the World of Wisdom!**

[Subscribe Here](#)



Visit [meandmath.com](https://meandmath.com) to learn more about us.