



Multiplication

Worksheet-1



THE BEST VIEW COMES AFTER THE HARDEST CLIMB.



1. Tanya pasted 9 photos on each page of her album. If she used 42 pages, how many photos did she paste?

A. 378

B. 368

C. 342

D. 3361

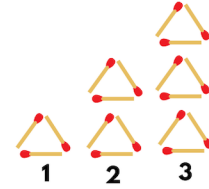
2. Each triangle requires 3 match sticks to form. At which pattern does it require 27 match sticks?

A. 7

B. 8

C. 9

D. 10



3. If  stands for 4 flowers, then how many flowers are there in the picture below?



A. 9

B. 27

C. 36

D. 45

4. What are the missing signs?

$$40 \text{ ? } 5 = 2 \text{ ? } 4$$

A. $-$, $+$

B. $+$, $-$

C. \div , \times

D. \times , \div

5. 10 children have to pay a total of ₹ 8 for the tickets to watch a show. How much do 100 children have to pay?

A. ₹ 60

B. ₹ 80

C. ₹ 100

D. ₹ 120

6. What is the missing number in the box?



$$\begin{array}{r} 4 \text{ ? } 8 \\ \times 4 \\ \hline 1672 \end{array}$$

A. 3

B. 0

C. 1

D. 4

7. If  stand for 50 apples, then  stand for how many apples?

A. 90

B. 30

C. 130

D. 80

8. Observe the given equations.

$$\begin{array}{l} \text{(i) } \square - \bigcirc = 6 \\ \text{(ii) } \bigcirc + \bigcirc = 2 \end{array}$$

Which of the following is also correct?

A. $\square \times \bigcirc = \square$

B. $\bigcirc \times 2 = \bigcirc$

C. $\square \times \square = 12$

D. $\square + \bigcirc = \square$

9. What is the missing number in the given box?

$$168 \times 8 = ? \times 8 - 49 \times 8$$

A. 99

B. 119

C. 125

D. 217

10. Observe the given product. What is the value of $\blacktriangle \times \blacktriangle$?

$$\begin{array}{r} 7\blacktriangle 4 \\ \times \quad 8 \\ \hline \blacktriangle 112 \end{array}$$

A. 1

B. 6

C. 12

D. 36



TM

MeandMath

BELIEVE YOURSELF

BOOST YOUR MATH PERFORMANCE WITH MeandMath



Our Premium Batches are 1:1, 1:2, 1:3 and 1:6 & another batch is 1: many batches.



Clear Doubts, Master Concepts, Excel with Confidence.



Learn on Your Schedule with Our Class Recordings.



Stay Ahead, Stay Sharp: Conquer Daily Homework Hassle-Free



Level Up Weekly: Ace Assessments with Confidence and Ease

Join Our Live Classes

**Preparing for the
Math Olympiad?**

Book Now >

Register to MnM Olympiad

**Want to test your
International Math
Rank?**

Register Here >

Visit meandmath.com to learn more about us.



TM

MeandMath

BELIEVE YOURSELF

A Roadmap to Brilliance

Our curriculum paves the way.

○ **Core** ○ **Advanced** ○ **Scholar**

Visit meandmath.com for further details on Curriculum.

“There are many paths to success in Math. We help all students discover theirs.”

Are you stuck, not sure how to solve math problem?

Want to Super Charge your Math skills with our World Class practice content!

Join our Homework Help Group!

[Join Now](#)



Subscribe today to get a resource to unlock the World of Wisdom!

[Subscribe Here](#)



Visit meandmath.com to learn more about us.