



Multiplication

Worksheet-2



IF YOU LOVE WHAT YOU ARE DOING, YOU WILL BE SUCCESSFUL.



1. There are 21 girls and 18 boys in each section of class 3. How many students are there in 5 such sections?

A. 155

B. 39

C. 195

D. 44

2. If the product of all the three numbers in any row, column or diagonal is the same, find the missing term in the given square.

2	36	3
9	?	4
12	1	18

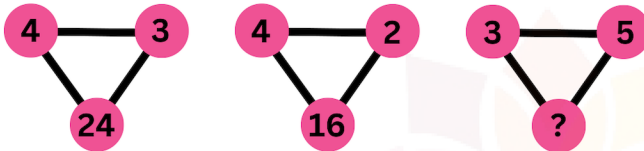
A. 5

B. 6

C. 8

D. 12

3. What is the missing term?



A. 30

B. 15

C. 2

D. 3

4. Observe the following. How much does each banana cost?

$$\text{Ice cream} + \text{Ice cream} + \text{Ice cream} = ₹ 30;$$







$$\text{Ice cream} + \text{Ice cream} + \text{Ice cream} + \text{Ice cream} + \text{Ice cream} + \text{Ice cream} = ?$$

A. ₹ 50

B. ₹ 60

C. ₹ 10

D. ₹ 90

5. If  ×  = 81 and  ×  = 64, What is the value of  ×  ?

A. 36

B. 17

C. 72

D. 56

6. Identify the missing digits in the boxes.

A. 362

B. 326

C. 236

D. 263

$$\begin{array}{r} \square \square \square \\ \times \quad 2 \\ \hline 6 \ 5 \ 2 \end{array}$$

7. Charan is as old as Dhanu. Jai is thrice as old as Dhanu. If their total age is 60, how old is Jai?

A. 12

B. 15

C. 30

D. 36

8. Which of the following can fill the given blank?

12 less than 7×4 is equal to _____.

A. $4 + 4 + 4 + 4$

B. $12 - 7 - 4$

C. 12×3

D. 3×4

9. Which of the following should replace * so that $0 * 18 = 0$ is correct?

A. + or -

B. \times or +

C. \times or \div

D. + or \div

10. Find the greatest number among the following.

A. 95×5

B. $95 + 5$

C. $95 - 5$

D. $95 \div 5$

MeandMath

BELIEVE YOURSELF



TM

MeandMath

BELIEVE YOURSELF

BOOST YOUR MATH PERFORMANCE WITH MeandMath



Our Premium Batches are 1:1, 1:2, 1:3 and 1:6 & another batch is 1: many batches.



Clear Doubts, Master Concepts, Excel with Confidence.



Learn on Your Schedule with Our Class Recordings.



Stay Ahead, Stay Sharp: Conquer Daily Homework Hassle-Free



Level Up Weekly: Ace Assessments with Confidence and Ease

Join Our Live Classes

**Preparing for the
Math Olympiad?**

Book Now >

Register to MnM Olympiad

**Want to test your
International Math
Rank?**

Register Here >

Visit meandmath.com to learn more about us.



TM

MeandMath

BELIEVE YOURSELF

A Roadmap to Brilliance

Our curriculum paves the way.

○ **Core** ○ **Advanced** ○ **Scholar**

Visit meandmath.com for further details on Curriculum.

“There are many paths to success in Math. We help all students discover theirs.”

Are you stuck, not sure how to solve math problem?

Want to Super Charge your Math skills with our World Class practice content!

Join our Homework Help Group!

[Join Now](#) ➔

Subscribe today to get a resource to unlock the World of Wisdom!

[Subscribe Here](#) ➔

Visit meandmath.com to learn more about us.