




Addition

Worksheet - 4



ACTION IS THE FOUNDATIONAL KEY TO ALL SUCCESS



1. Latika earned some money in a month. She gave ₹15000 to her father, spent ₹1000, and saved the rest. She saves ₹4000. What is the value of money earned?

A. ₹ 25000

B. ₹ 20000

C. ₹ 19000

D. ₹ 18000

2. Find the value of P.

$$P + 1 = Q$$

$$Q + 1 = R$$

$$P + Q = 15$$

$$Q + R = 17$$

A. 6

B. 9

C. 8

D. 7

3. Mr. Gupta bought a house for ₹1672000. He spent ₹12582 on the furniture and ₹8540 for the curtains, then he spent another ₹5675 for preparing the front lawn of the house. How much money did he spend altogether?

A. ₹ 1678997

B. ₹ 1698797

C. ₹ 1498567

D. ₹ 1512998

4. In a town, there are two public libraries. The number of books in one library is 3,48,386 and the number of books in the other library is 5,14,058.

(a) What is the total number of books in both the libraries?

(b) How many more books does the second library have than the first library?

(a)

(b)

A. 765484

268493

B. 765239

168672

C. 862444

165672

D. 865444

158672

5. A tea-plucker plucked 412250, 334278 and 243581 tea leaves on three successive days. How many tea leaves he plucked in all during these three days?

A. 991009

B. 990109

C. 900999

D. 890109

6. 12685 books were bought for the primary section of the school library, 15790 books were bought for the middle section and 13698 books for the senior section. What was the total number of books bought?

A. 53217

B. 42173

C. 41377

D. 40076

7. Find the value of $(P + S)$ by completing the given addition box.







+	19623	5241
9681	P	Q
24321	R	S

A. 58764

B. 58866

C. 54382

D. 58764

8. What is  +  +  = ? if  +  = 105,  = 55.

A. 170

B. 175

C. 165

D. 160

9. What is 74902 more than the greatest 5-digit number?

A. 1,09,109

B. 1,74,901

C. 4,00,109

D. 1,99,109

10. A particular brand of toothpaste is used by 279468 men, 196485 women and 69278 children. What is the total number of people who use that toothpaste?

A. 543431

B. 545231

C. 649231

D. 739321



TM

MeandMath
BELIEVE YOURSELF

BOOST YOUR MATH PERFORMANCE WITH MeandMath



Our Premium Batches are 1:1, 1:2, 1:3 and 1:6 & another batch is 1: many batches.



Clear Doubts, Master Concepts, Excel with Confidence.



Learn on Your Schedule with Our Class Recordings.



Stay Ahead, Stay Sharp: Conquer Daily Homework Hassle-Free



Level Up Weekly: Ace Assessments with Confidence and Ease

Join Our Live Classes

**Preparing for the
Math Olympiad?**

Book Now >

Register to MnM Olympiad

**Want to test your
International Math
Rank?**

Register Here >

Visit meandmath.com to learn more about us.



TM

MeandMath

BELIEVE YOURSELF

A Roadmap to Brilliance

Our curriculum paves the way.

○ **Core** ○ **Advanced** ○ **Scholar**

Visit meandmath.com for further details on Curriculum.

“There are many paths to success in Math. We help all students discover theirs.”

Are you stuck, not sure how to solve math problem?

Want to Super Charge your Math skills with our World Class practice content!

Join our Homework Help Group!

[Join Now](#)



Subscribe today to get a resource to unlock the World of Wisdom!

[Subscribe Here](#)



Visit meandmath.com to learn more about us.