



# Cambridge IGCSE™

CANDIDATE  
NAME


--

CENTRE  
NUMBER

--	--	--	--	--

CANDIDATE  
NUMBER

--	--	--	--



**MATHEMATICS**

**0580/12**

Paper 1 (Core)

**February/March 2023**

**1 hour**

You must answer on the question paper.

You will need: Geometrical instruments

## INSTRUCTIONS

- Answer **all** questions.
- Use a black or dark blue pen. You may use an HB pencil for any diagrams or graphs.
- Write your name, centre number and candidate number in the boxes at the top of the page.
- Write your answer to each question in the space provided.
- Do **not** use an erasable pen or correction fluid.
- Do **not** write on any bar codes.
- You should use a calculator where appropriate.
- You may use tracing paper.
- You must show all necessary working clearly.
- Give non-exact numerical answers correct to 3 significant figures, or 1 decimal place for angles in degrees, unless a different level of accuracy is specified in the question.
- For  $\pi$ , use either your calculator value or 3.142.

## INFORMATION

- The total mark for this paper is 56.
- The number of marks for each question or part question is shown in brackets [ ].

This document has **12** pages. Any blank pages are indicated.

1 Write the number twenty-five million in figures.

..... [1]

2 (a) Write 0.7 as a fraction.

..... [1]

(b) Write  $\frac{13}{20}$  as a percentage.

..... % [1]

3                    -7     12     -3     2     8     -6     15     -4     -8

From the list of numbers, find

(a) all the numbers which are less than  $-5$

..... [1]

(b) the product of the largest number and the smallest number.

..... [1]

4 An exam starts at 11 50 and lasts for  $2\frac{1}{4}$  hours.

Work out the time that the exam finishes.

..... [1]

5 Write 56.17345 correct to 1 decimal place.

..... [1]

6 Work out the number of seconds in 5 hours.

.....s [2]

7	12	15	27	29	91	93
---	----	----	----	----	----	----

From the list of numbers, write down

(a) a cube number

..... [1]

(b) a prime number.

..... [1]

8  $\mathbf{v} = \begin{pmatrix} -1 \\ 3 \end{pmatrix}$       $\mathbf{y} = \begin{pmatrix} 2 \\ 5 \end{pmatrix}$

Find

(a)  $\mathbf{v} - \mathbf{y}$

$\begin{pmatrix} \phantom{0} \\ \phantom{0} \end{pmatrix}$  [1]

(b)  $2\mathbf{v}$ .

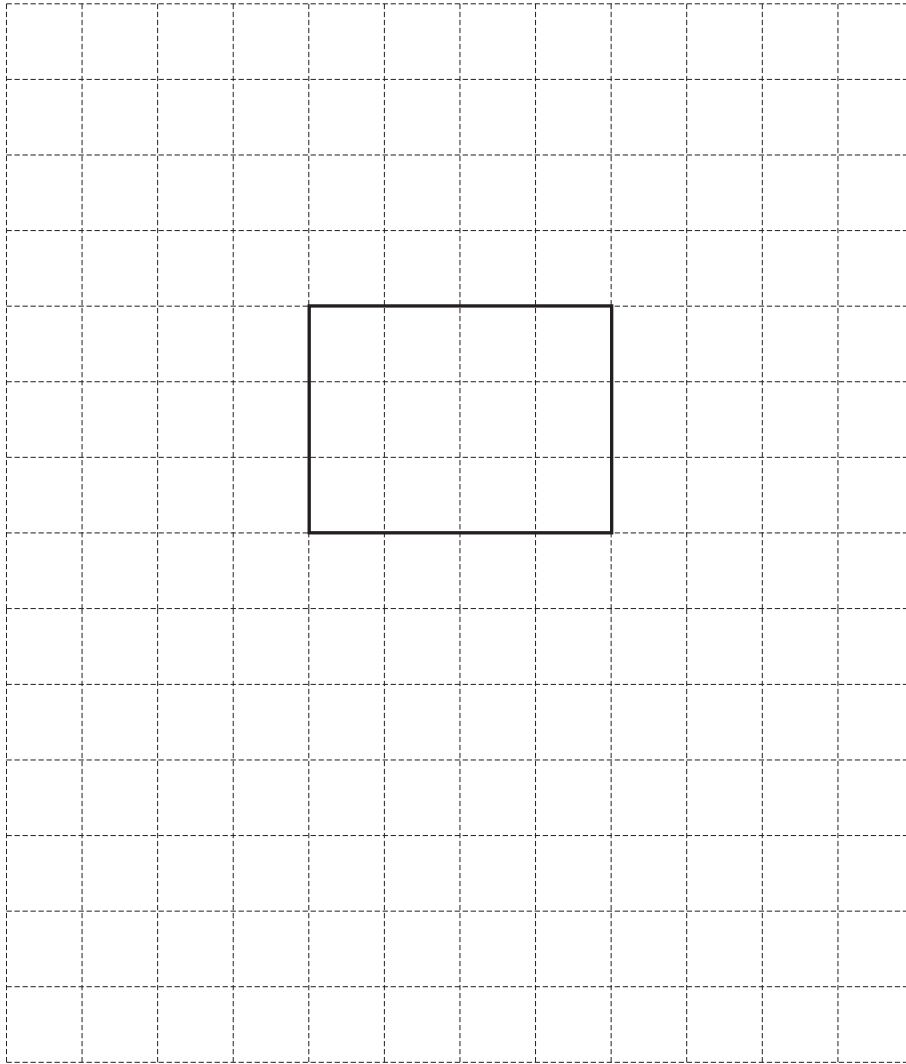
$\begin{pmatrix} \phantom{0} \\ \phantom{0} \end{pmatrix}$  [1]

9 A suit costs 6500 rupees.

Calculate the cost of the suit in dollars when the exchange rate is 1 rupee = \$0.013 .

\$ ..... [1]

- 10 The diagram shows one face of a cuboid on a  $1 \text{ cm}^2$  grid.



The cuboid has a volume of  $24 \text{ cm}^3$ .

Complete a net of this cuboid.

[3]

- 11 The median of six numbers is 61.  
Five of the numbers are 24, 43, 58, 71 and 85.

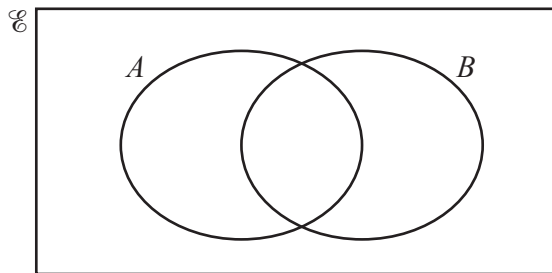
Work out the sixth number.

..... [1]

- 12 Work out the size of one interior angle of a regular 9-sided polygon.

..... [2]

13



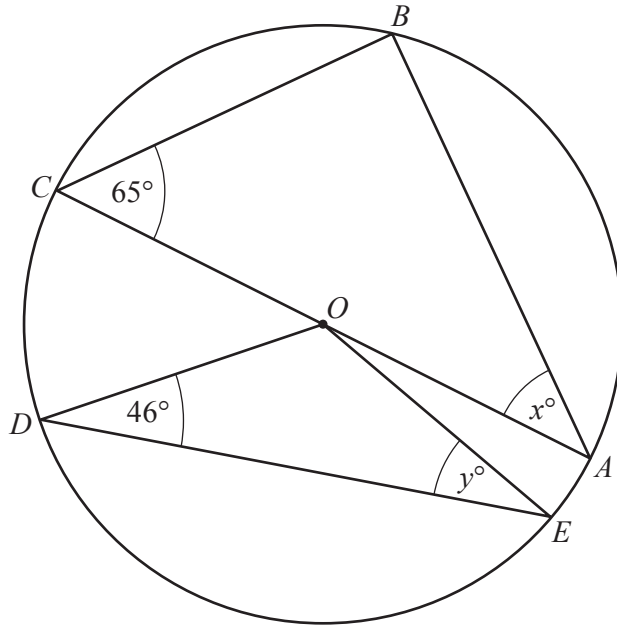
On the Venn diagram, shade the region  $A \cap B$ .

[1]

- 14 Factorise completely.

$$8g - 2g^2$$

..... [2]



NOT TO  
SCALE

The diagram shows a circle, centre  $O$ , with diameter  $AC$ .  
 $A$ ,  $B$ ,  $C$ ,  $D$  and  $E$  lie on the circumference of the circle.

- (a) Find the value of  $x$ .  
Give a reason for your answer.

$x = \dots\dots\dots$  because  $\dots\dots\dots$  [2]

- (b) Find the value of  $y$ .  
Give a reason for your answer.

$y = \dots\dots\dots$  because  $\dots\dots\dots$  [2]

- 16 Without using a calculator, work out  $\frac{4}{7} \div 8$ .

You must show all your working and give your answer as a fraction in its simplest form.

..... [2]

- 17 A school records how many calculators it sells each week for 40 weeks. The results are shown in the table.

Number of calculators	Frequency
0	14
1	12
2	6
3	5
4	0
5	2
6	1

Work out the mean number of calculators the school sells each week.

..... [3]

- 18 The mass,  $m$  kg, of a bag of sand is 12 kg, correct to the nearest kilogram.

Complete the statement about the value of  $m$ .

$$\dots\dots\dots \leq m < \dots\dots\dots \quad [2]$$

- 19 Qianna invests \$3000 at a rate of 4% per year compound interest.

Calculate the value of her investment at the end of 6 years.

$$\text{\$ } \dots\dots\dots \quad [2]$$

- 20 Solve.

$$\frac{25 - 2u}{3} = 2$$

$$u = \dots\dots\dots \quad [2]$$

- 21 Calculate  $0.3^2$ .  
Give your answer in standard form.

$$\dots\dots\dots \quad [2]$$

- 22 The probability of passing a driving test is 0.36.  
600 people take this driving test.

Work out the expected number of these people that will pass.

$$\dots\dots\dots \quad [1]$$



- 23 Solve the simultaneous equations.  
You must show all your working.

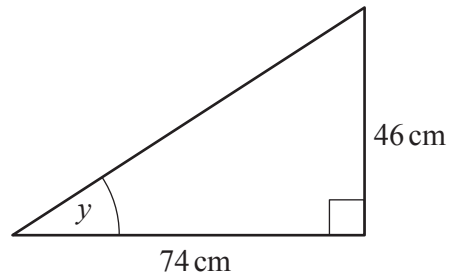
$$3x - 2y = 19$$

$$x + y = 3$$

$$x = \dots\dots\dots$$

$$y = \dots\dots\dots [3]$$

24



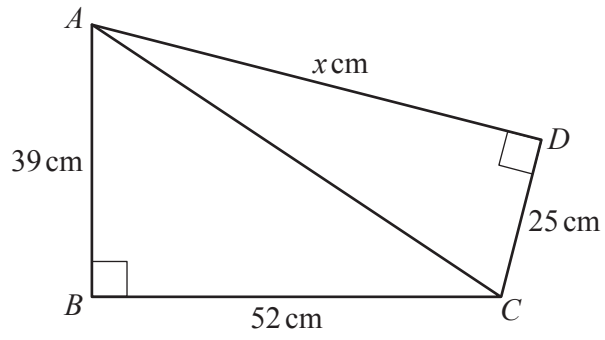
NOT TO  
SCALE

The diagram shows a right-angled triangle.

Show that angle  $y$  is  $31.9^\circ$ , correct to 1 decimal place.

[2]

25

NOT TO  
SCALE

The diagram shows two right-angled triangles,  $ABC$  and  $ACD$ .

Work out the value of  $x$ .

$x = \dots\dots\dots$  [4]

26 A circle has an area of  $25\pi \text{ cm}^2$ .

- (a) Work out the circumference of the circle.  
Give your answer in terms of  $\pi$ .

..... cm [3]

- (b) Two of the circles are used as the ends of a cylinder, with height  $h$  cm.  
The total surface area of the cylinder is  $170\pi \text{ cm}^2$ .

Work out the value of  $h$ .

$h =$  ..... [3]

**BLANK PAGE**

---

Permission to reproduce items where third-party owned material protected by copyright is included has been sought and cleared where possible. Every reasonable effort has been made by the publisher (UCLES) to trace copyright holders, but if any items requiring clearance have unwittingly been included, the publisher will be pleased to make amends at the earliest possible opportunity.

To avoid the issue of disclosure of answer-related information to candidates, all copyright acknowledgements are reproduced online in the Cambridge Assessment International Education Copyright Acknowledgements Booklet. This is produced for each series of examinations and is freely available to download at [www.cambridgeinternational.org](http://www.cambridgeinternational.org) after the live examination series.

Cambridge Assessment International Education is part of Cambridge Assessment. Cambridge Assessment is the brand name of the University of Cambridge Local Examinations Syndicate (UCLES), which is a department of the University of Cambridge.